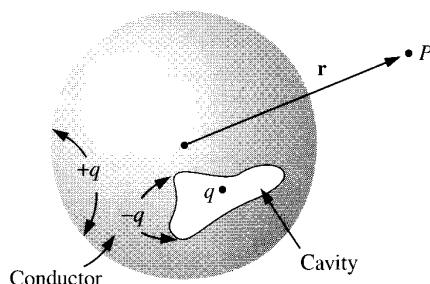



## PHYS 507

### HANDOUT 4 - Questions on Conductors and Capacitors

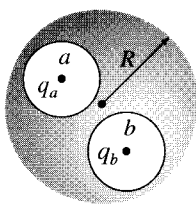
**4.1** An uncharged conductor with a weird shape has a cavity inside. In the cavity there is a charge  $q$ . What is the field outside the sphere?



**4.2** A metal sphere of radius  $R$ , carrying charge  $q$ , is surrounded by a thick concentric metal shell (with inner radius  $a$  and outer radius  $b$ ). The shell carries no net charge. (a) Find the surface charge density  $\sigma$  at  $R$ , at  $a$  and at  $b$ . (b) Find the potential at the center, using infinity as the reference point. (c) Now the outer surface is touched to a grounding wire, which lowers its potential to zero (same as infinity). How do your answers to (a) and (b) change?



**4.3** Two spherical cavities, of radii  $a$  and  $b$ , are hollowed out from the interior of a (neutral) conducting sphere of radius  $R$ . At the center of each cavity a point charge is placed – call these charges  $q_a$  and  $q_b$ . (a) Find the surface charge densities  $\sigma_a$ ,  $\sigma_b$  and  $\sigma_R$ . (b) What is the field outside the conductor? (c) What is the field within each cavity? (d) What is the net force on  $q_a$  and  $q_b$ ? (e) Which of these answers would change if a third charge  $q_c$  were brought near the conductor?

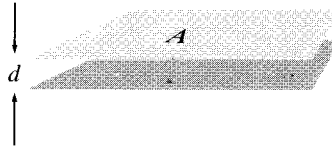


**4.4** Two large metal plates (each of area  $A$ ) are held a distance  $d$  apart. Suppose we

put a charge  $Q$  on each plate; what is the electrostatic pressure on the plates?

**4.5** A metal sphere of radius  $R$  carries a total charge  $Q$ . What is the force of repulsion between the “northern” hemisphere and the “southern” hemisphere?

**4.6** Find the capacitance of a «parallel» plate capacitor consisting of two metal surfaces of area  $A$  held a distance  $d$  apart.



**4.7** Find capacitance of two concentric spherical metal shells, with radii  $a$  and  $b$ .

**4.8** Find the capacitance per unit length of two coaxial metal cylinder tubes of radii  $a$  and  $b$ .

**4.9** Prove that the electric field inside a cavity surrounded by a conductor is zero.

**4.10** Prove that the force per unit surface on a large charged surface is given by

$$\mathbf{f} = \frac{1}{2\epsilon_0} \sigma^2 \hat{\mathbf{n}}.$$

**4.11** Prove that the energy of a charged capacitor is given by  $C = Q^2 / 2C$ .