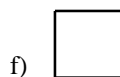
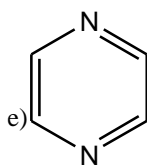
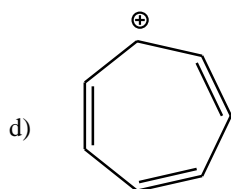
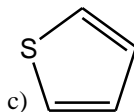
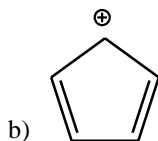
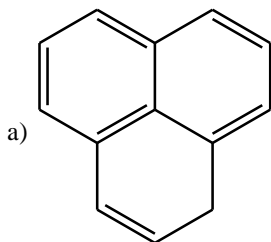
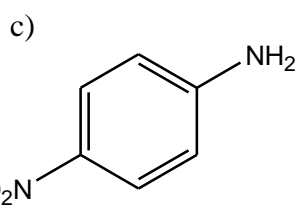
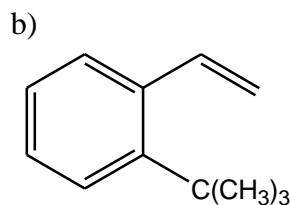
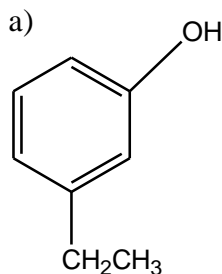


## Exercise Ch 4

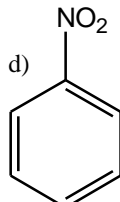
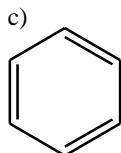
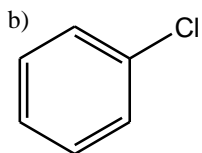
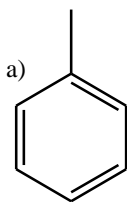
Which of these structure will be **aromatic**:



Name each of the following structures (**common name and IUPAC**)



Arrange the following series of compounds in **decreasing order** of reactivity toward **Nitration**



## Exercise Ch 4

Complete the following reactions

