




HW 1

Vectors

1.  The polar coordinates of a point are $r = 5.50$ m and $\theta = 240^\circ$. What are the Cartesian coordinates of this point?
19.  A vector has an x component of -25.0 units and a y component of 40.0 units. Find the magnitude and direction of this vector.
21. Obtain expressions in component form for the position vectors having the following polar coordinates: (a) 12.8 m, 150° (b) 3.30 cm, 60.0° (c) 22.0 in., 215° .
27. Given the vectors $\mathbf{A} = 2.00\hat{\mathbf{i}} + 6.00\hat{\mathbf{j}}$ and $\mathbf{B} = 3.00\hat{\mathbf{i}} - 2.00\hat{\mathbf{j}}$, (a) draw the vector sum $\mathbf{C} = \mathbf{A} + \mathbf{B}$ and the vector difference $\mathbf{D} = \mathbf{A} - \mathbf{B}$. (b) Calculate \mathbf{C} and \mathbf{D} , first in terms of unit vectors and then in terms of polar coordinates, with angles measured with respect to the $+x$ axis.
30. Vector \mathbf{A} has x and y components of -8.70 cm and 15.0 cm, respectively; vector \mathbf{B} has x and y components of 13.2 cm and -6.60 cm, respectively. If $\mathbf{A} - \mathbf{B} + 3\mathbf{C} = 0$, what are the components of \mathbf{C} ?

- 31.** Consider the two vectors $\mathbf{A} = 3\hat{\mathbf{i}} - 2\hat{\mathbf{j}}$ and $\mathbf{B} = -\hat{\mathbf{i}} - 4\hat{\mathbf{j}}$. Calculate (a) $\mathbf{A} + \mathbf{B}$, (b) $\mathbf{A} - \mathbf{B}$, (c) $|\mathbf{A} + \mathbf{B}|$, (d) $|\mathbf{A} - \mathbf{B}|$, and (e) the directions of $\mathbf{A} + \mathbf{B}$ and $\mathbf{A} - \mathbf{B}$.
- 33.** A particle undergoes the following consecutive displacements: 3.50 m south, 8.20 m northeast, and 15.0 m west. What is the resultant displacement?
- 41.** The vector \mathbf{A} has x , y , and z components of 8.00, 12.0, and -4.00 units, respectively. (a) Write a vector expression for \mathbf{A} in unit-vector notation. (b) Obtain a unit-vector expression for a vector \mathbf{B} one fourth the length of \mathbf{A} pointing in the same direction as \mathbf{A} . (c) Obtain a unit-vector expression for a vector \mathbf{C} three times the length of \mathbf{A} pointing in the direction opposite the direction of \mathbf{A} .
- 49.**  Three displacement vectors of a croquet ball are shown in Figure P3.49, where $|\mathbf{A}| = 20.0$ units, $|\mathbf{B}| = 40.0$ units, and $|\mathbf{C}| = 30.0$ units. Find (a) the resultant in unit-vector notation and (b) the magnitude and direction of the resultant displacement.

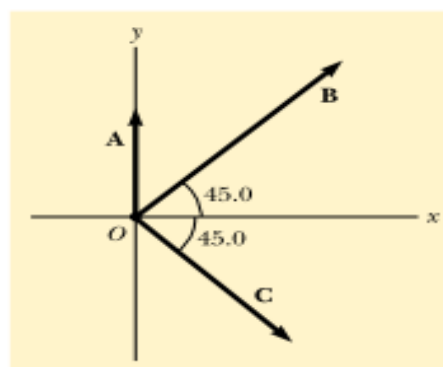


Figure P3.49

50. If $\mathbf{A} = (6.00\hat{\mathbf{i}} - 8.00\hat{\mathbf{j}})$ units, $\mathbf{B} = (-8.00\hat{\mathbf{i}} + 3.00\hat{\mathbf{j}})$ units, and $\mathbf{C} = (26.0\hat{\mathbf{i}} + 19.0\hat{\mathbf{j}})$ units, determine a and b such that $a\mathbf{A} + b\mathbf{B} + \mathbf{C} = 0$.

59. A person going for a walk follows the path shown in Fig. P3.59. The total trip consists of four straight-line paths. At the end of the walk, what is the person's resultant displacement measured from the starting point?

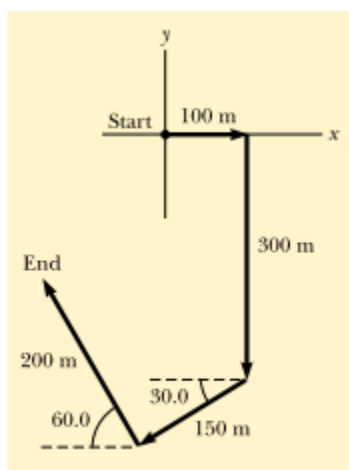


Figure P3.59