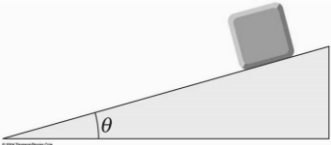
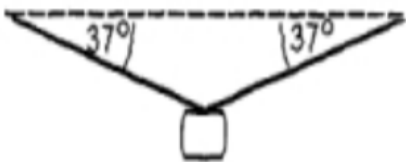
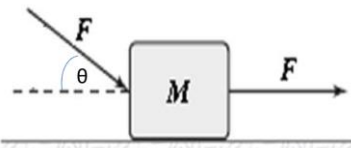


Take  $g = 9.8 \text{ ms}^{-2}$  where ever needed

1	Newton's law of universal gravitation is represented by $F = \frac{GMm}{r^2}$ Where F is the gravitational force exerted by one object on another (force has the SI units $\text{kg}\cdot\text{m}/\text{s}^2$ ), M and m are the masses of the objects, and r is a distance. The SI units of the proportionality constant G is: A) $\text{m}^2/\text{kg}\cdot\text{s}^3$ B) $\text{s}^2/\text{kg}\cdot\text{m}^3$ C) $\text{kg} / \text{s}^2 \cdot \text{m}^3$ D) $\text{s}^3/\text{kg}\cdot\text{m}^2$ E) $\text{m}^3/\text{kg}\cdot\text{s}^2$	E
2	An object has a one dimensional motion described by the equation $x = 1 + 2t + 4t^2$ , where x is the position in meters and t is the time in seconds. The change in the velocity from time $t_i = 0$ to $t_f = 5 \text{ s}$ is: A) 24 m/s      B) 36 m/s      C) 16 m/s      D) 32 m/s      E) 40 m/s	E
3	Two bodies A and B are dropped from heights of 16 m and 25 m, respectively. The ratio of the time taken by them, $t_A / t_B$ , to reach the ground is: A) 3/5      B) 4/5      C) 3/4      D) 3/8      E) 5/8	B
4	Two identical balls are at rest side by side at the bottom of a hill. Sometime after ball A is kicked up the hill, ball B is given a kick up the hill to a different height. Ball A is headed downhill when it passes ball B headed up the hill. At the instant when ball A passes ball B: A) it has the same position and velocity as ball B      B) it has the same velocity and acceleration as ball B      C) it has the same position, displacement and velocity as ball B      D) it has the same displacement and velocity as ball B      E) it has the same position and acceleration as ball B	E
5	A car moving along a straight track changes its velocity from 40 m/s to 80 m/s in a distance of 250 m. the acceleration of the car during this time is: A) $9.6 \text{ m/s}^2$ B) $7 \text{ m/s}^2$ C) $12 \text{ m/s}^2$ D) $8 \text{ m/s}^2$ E) $10.7 \text{ m/s}^2$	A
6	Vector <b>A</b> has x and y components of -8.7 cm and 15 cm, respectively; vector <b>B</b> has x and y components of 13.2 cm and -6.6 cm, respectively. If $\mathbf{A} - \mathbf{B} + 4\mathbf{C} = 0$ , the components of vector <b>C</b> are: A) $5.5 \mathbf{i}, -5.4 \mathbf{j}$ B) $-3.6 \mathbf{i}, 5.1 \mathbf{j}$ C) $-7.3 \mathbf{i}, 7.2 \mathbf{j}$ D) $3.2 \mathbf{i}, -4.1 \mathbf{j}$ E) $10.95 \mathbf{i}, -10.8 \mathbf{j}$	A
7	A vector starts at x, y coordinates (3, 4) and ends at x, y coordinates (-2, 16). What are the magnitude and direction of this vector? A) 19 m, $173^\circ$ B) 13 m, $113^\circ$ C) 13 m, $220^\circ$ D) 19 m, $137^\circ$ E) 17 m, $120^\circ$	B
8	A cannon ball is fired from a cannon at an angle $\theta$ to reach a maximum range of 4000 m. If this cannon ball is fired straight up, how high can it reach? A) 800 m      B) 1200 m      C) 1000 m      D) 2000 m      E) 1500 m	D

9	<p>A particle is moving in the <math>xy</math> plane from <math>(0,0)</math> with an initial velocity of <math>v = 16\mathbf{i} - 12\mathbf{j}</math> m/s. If its constant acceleration is <math>\mathbf{a} = 3\mathbf{i} - 6\mathbf{j}</math> m/s<sup>2</sup>, what is its speed after 3 s?</p> <p>A) 39 m/s      B) 45.6 m/s      C) 24 m/s      D) 41 m/s      E) 32.6 m/s</p>	A	
10	<p>A car has the maximum centripetal acceleration <math>6 \text{ m/s}^2</math>, so that the car can turn without skidding out of a curved path. If the car is moving at a constant speed of 108 km/h, what is the radius of the curve?</p> <p>A) 0.09 km      B) 0.15 km      C) 0.05 km      D) 0.3 km      E) 0.4 km</p>	B	
11	<p>Two projectiles are launched at 100 m/s, the angle of elevation for the first being <math>30^\circ</math> and for the second <math>60^\circ</math>. Which of the following statements is correct?</p> <p>A) Both projectiles have the same range      B) The second projectile has the lower range      C) The first projectile has the lower speed at maximum altitude      D) The first projectile has the lower range      E) The projectiles do not have the same acceleration while in flight</p>	A	
12	<p>A 5 kg block slides down a <math>30^\circ</math> incline at a constant speed when a 10 N force is applied acting up and parallel to the incline. The coefficient of kinetic friction between the block and the surface of the incline is:</p>		D
13	<p>A 1700 N car, at a ski lift, is temporarily suspended at the halfway point, causing the wire to sag (يتدلى) by an angle of <math>37^\circ</math> below the horizontal. The tension in the cable is:</p>		C
14	<p>The horizontal surface on which the block slides is frictionless. If <math>F = 20 \text{ N}</math>, <math>\theta = 41^\circ</math> and <math>M = 8.5 \text{ kg}</math>, the magnitude of the acceleration of the block is:</p>		C
15	<p>The apparent weight of a fish in an elevator is the same as true weight when the elevator.</p> <p>A) accelerates upward with <math>a = 1 \text{ m/s}^2</math>      B) accelerates upward with <math>a = 2 \text{ m/s}^2</math>      C) accelerates downward with <math>a = 1 \text{ m/s}^2</math>      D) accelerates downward with <math>a = 2 \text{ m/s}^2</math>      E) moves upward or downward at constant velocity</p>	E	

The end

## **Rough work**